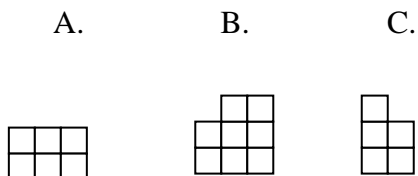
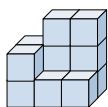


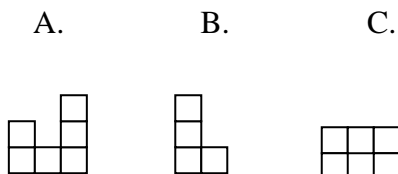
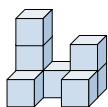
**Solve each problem.****Answers**

- 1) If you were looking at the 3d shape from the left side what would you see?



1. _____

- 2) If you were looking at the 3d shape from the left side what would you see?



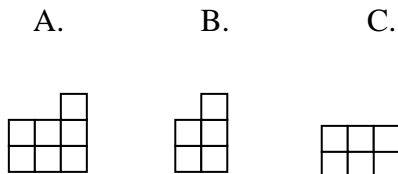
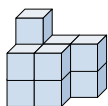
2. _____

3. _____

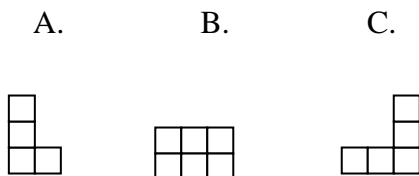
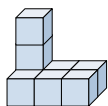
4. _____

5. _____

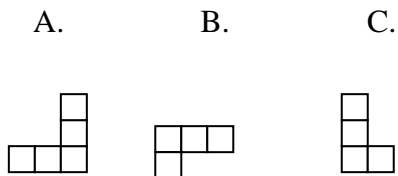
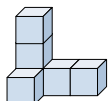
- 3) If you were looking at the 3d shape from the back what would you see?



- 4) If you were looking at the 3d shape from the back what would you see?



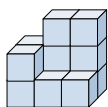
- 5) If you were looking at the 3d shape from above what would you see?





Solve each problem.

- 1) If you were looking at the 3d shape from the left side what would you see?



A.



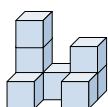
B.



C.



- 2) If you were looking at the 3d shape from the left side what would you see?



A.



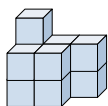
B.



C.



- 3) If you were looking at the 3d shape from the back what would you see?



A.



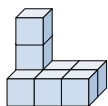
B.



C.



- 4) If you were looking at the 3d shape from the back what would you see?



A.



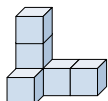
B.



C.



- 5) If you were looking at the 3d shape from above what would you see?



A.



B.



C.

**Answers**1. **C**2. **B**3. **A**4. **C**5. **B**